

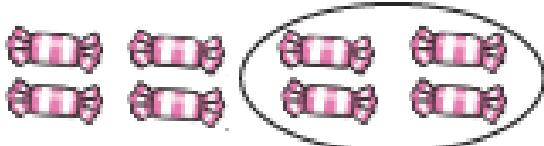
## Introducing Fractions

# Fractions of Amounts

Find half of these amounts. Use counters or buttons to help, or draw a circle around half to find the answer. The first one has been done for you.

half of  is

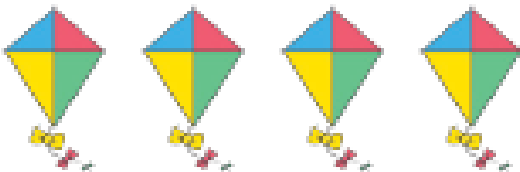
sweets



$\frac{1}{2}$  of  =

half of  is

kites



$\frac{1}{2}$  of  =

half of  is


cats



$\frac{1}{2}$  of  =

half of  is


flowers



$\frac{1}{2}$  of  =

half of  is


trees



$\frac{1}{2}$  of  =

half of  is

stars




$\frac{1}{2}$  of  =

# Fractions of Amounts

Find half of these amounts. Use counters or buttons to help, or draw a circle around half to find the answer. The first one has been done for you.

half of  is


sweets



$\frac{1}{2}$  of  =

half of  is

kites



$\frac{1}{2}$  of  =

half of  is

cats



$\frac{1}{2}$  of  =

Now try these:

Draw 12 stars then find half.

Draw 16 flowers then find half.